

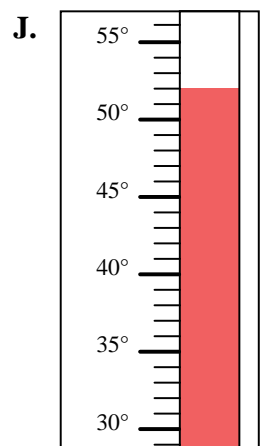
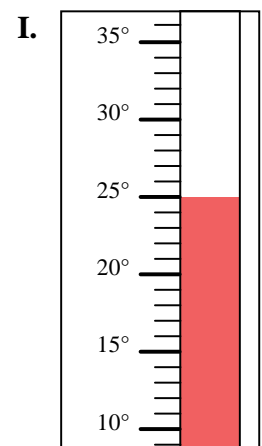
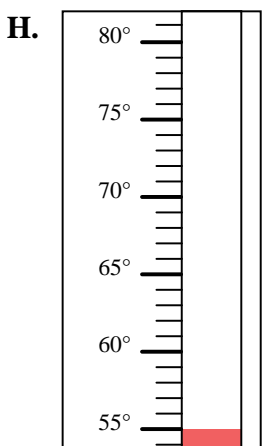
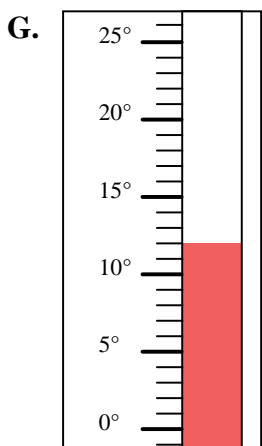
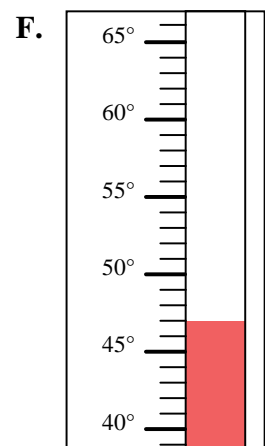
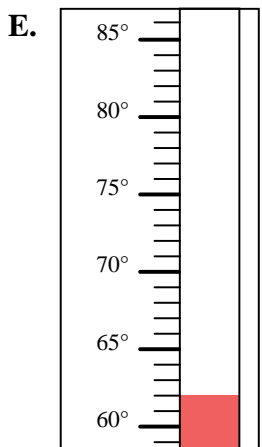
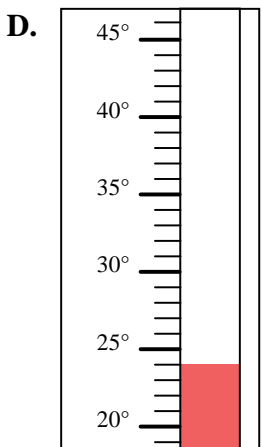
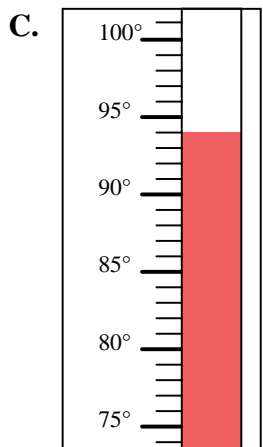
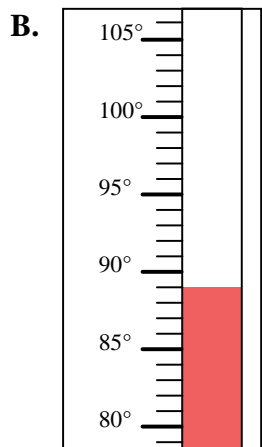
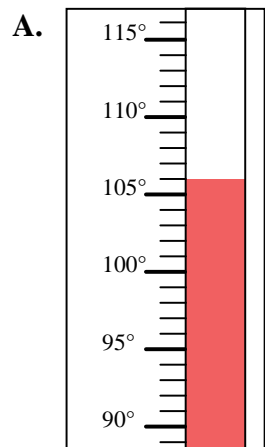


Determine which letter best answers each question.

Answers

- 1) Which thermometer best represents the temperature 89° ?
- 2) Which thermometer best represents the temperature 24° ?
- 3) Which thermometer best represents the temperature 94° ?
- 4) Which thermometer best represents the temperature 52° ?
- 5) Which thermometer best represents the temperature 55° ?
- 6) Which thermometer best represents the temperature 47° ?
- 7) Which thermometer best represents the temperature 106° ?
- 8) Which thermometer best represents the temperature 12° ?
- 9) Which thermometer best represents the temperature 25° ?
- 10) Which thermometer best represents the temperature 62° ?

1. _____
2. _____
3. _____
4. _____
5. _____
6. _____
7. _____
8. _____
9. _____
10. _____





Determine which letter best answers each question.

- 1) Which thermometer best represents the temperature 89° ?
- 2) Which thermometer best represents the temperature 24° ?
- 3) Which thermometer best represents the temperature 94° ?
- 4) Which thermometer best represents the temperature 52° ?
- 5) Which thermometer best represents the temperature 55° ?
- 6) Which thermometer best represents the temperature 47° ?
- 7) Which thermometer best represents the temperature 106° ?
- 8) Which thermometer best represents the temperature 12° ?
- 9) Which thermometer best represents the temperature 25° ?
- 10) Which thermometer best represents the temperature 62° ?

Answers

1. **B**
2. **D**
3. **C**
4. **J**
5. **H**
6. **F**
7. **A**
8. **G**
9. **I**
10. **E**

